

Guided Reading

1.) How does Meggie feel when she reads the stories? (3 marks)

- Answer
- Evidence
- Explain

2.) What is Mo's job? (3 marks)

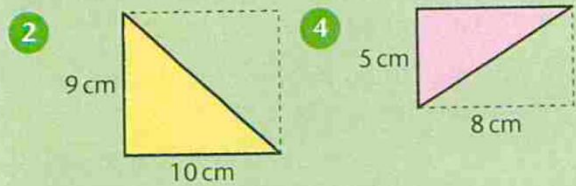
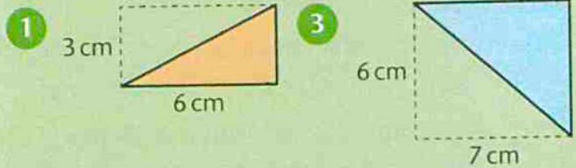
Maths

Complete these mixed area questions. Remember the method for each shape!

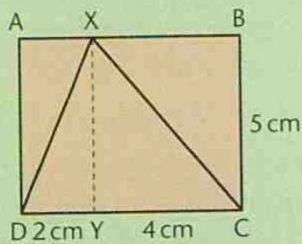
A

All lengths are in cm. Find the area of:

a) the rectangle b) the coloured triangle.

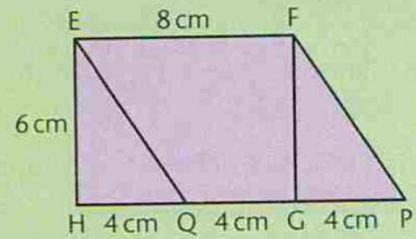


5 Find the area of:



- | | |
|-------------------|-----------------|
| a) rectangle AXYD | b) triangle DXY |
| c) rectangle XBCY | d) triangle XCY |
| e) rectangle ABCD | f) triangle DXC |

6



Find the area of:

- rectangle EFGH
- triangle EQH
- triangle FPG
- parallelogram EFPQ.

Find the area of each triangle.

