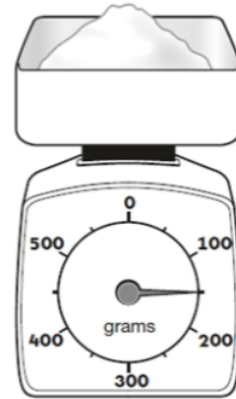


Friday - Jumpstart

Apply

How much does the sugar weigh?

 g

$\square = 10 + 10$	$10 - 10 =$
$\square = 74 + 37$	$92 - 36 =$
$4 \times 5 =$	$\frac{1}{3}$ of 21 =
$8 \times \square = 40$	$\frac{2}{3}$ of 21 =

Reading - Friday

L1: To review a book that I have read.

Book review template.

Please note that you can create your own book reviews-this document does not need to be printed!



Year 2 Book Review

Title:

Author:

Rating: ★ ★ ★ ★ ★

Picture from story:

I liked/disliked this book because:

Maths - Friday

L1: To apply knowledge of addition and subtraction

Mild

Q1.



How many shells does Amy have?

Q2.


There are 6 eggs in each box.



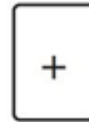
How many eggs are there altogether?

Q3.

Match each box to its answer on the number line.



Q4. Here are two cards.



Choose a card to make each calculation correct.

One is done for you.

$$4 \quad \boxed{+} \quad 1 = 5$$

$$23 \quad \boxed{} \quad 1 = 22$$

$$40 \quad \boxed{} \quad 1 = 39$$

$$19 \quad \boxed{} \quad 1 = 20$$

Q5.

There are 20 balloons.

7 balloons fly away.



How many balloons are left?

Q6. Look at these cards.



Use one card each time to make these correct.

$$\boxed{7} + \boxed{} = \boxed{10}$$

$$\boxed{10} - \boxed{} = \boxed{4}$$

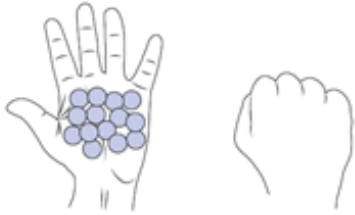
Maths - Friday

LI: To apply knowledge of addition and subtraction

Spicy

Q1. Amy has **21** counters altogether.

She has **14** counters in one hand.



How many counters does she have in the other hand?

Q2. Write six **different** numbers to make these sums correct.

<input type="text"/>	+	<input type="text"/>	= 27
<input type="text"/>	+	<input type="text"/>	= 27
<input type="text"/>	+	<input type="text"/>	= 27

□

Q3. When Desi is **4** years old, Sita is **10**



When Desi is **9** years old, how old will Sita be?

Q4. The strawberry weighs **24** grams.



The strawberry and tomato together weigh **69** grams.



What does the tomato weigh?

 g


Q5. Sita has these coins in her purse.



How much money does she have?

 p

Q6. There are **60** sweets in a bag.




20 sweets are red.
16 sweets are yellow.
The rest are green.

How many sweets are green?

English - Friday

L1: To write instructions.



Please write detailed instructions for how to play your Winter Olympics game.

Sentence starters:

You will need...

First,

Next,

After that,

Finally,

Make sure you...