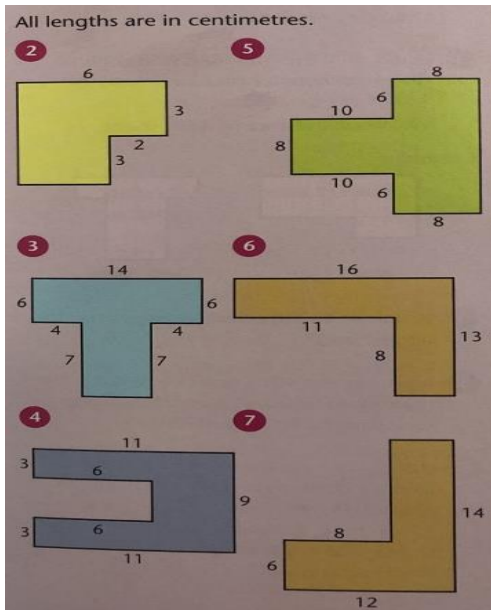


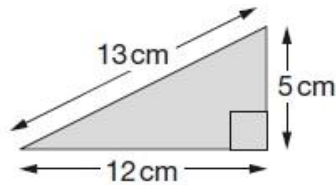
# Maths



- 2. 24cm
- 3. 54cm
- 4. 52cm
- 5. 76cm
- 6. 58cm
- 7. 52cm

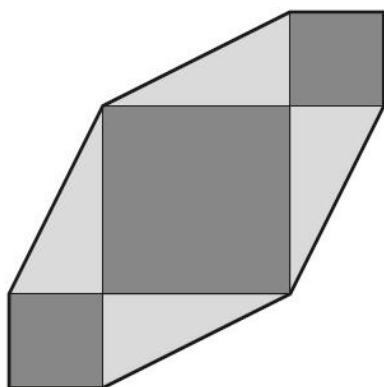
## Activity Three

Chen has some right-angled triangular tiles.



Not actual size

He makes this shape with four of his triangular tiles and three square tiles.



Not actual size

What is the **perimeter** of Chen's shape?

**72cm**