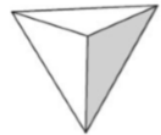
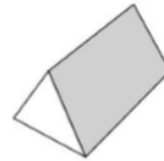


Friday - Jumpstart

$2 + 7 =$	$12 - 6 =$
$200 + 300 =$	$100 - 30 =$
$8 \times 5 =$	$8 \div 4 =$
$\square \times 5 = 5$	$90 \div 10 =$

Apply

Which shape has more than 8 edges?



Reading - Friday

LI: To review a book that I have read.

Book review template.

Please note that you can create your own book reviews-this document does not need to be printed!



Year 2 Book Review

Title:

Author:

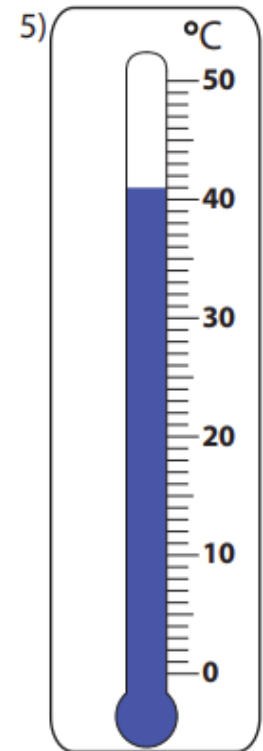
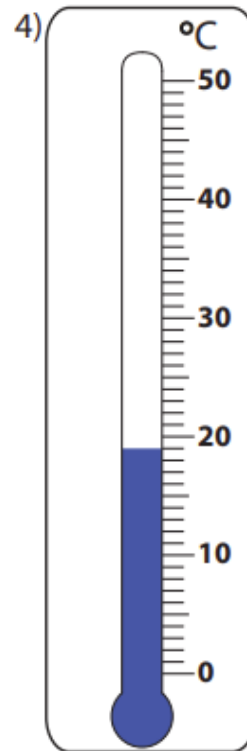
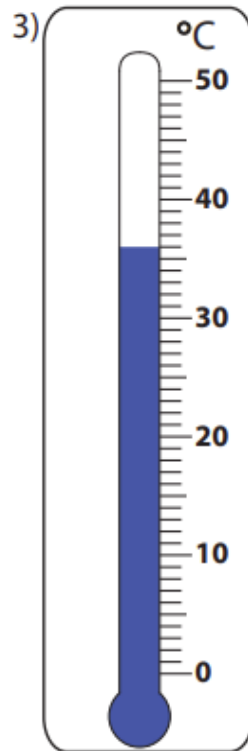
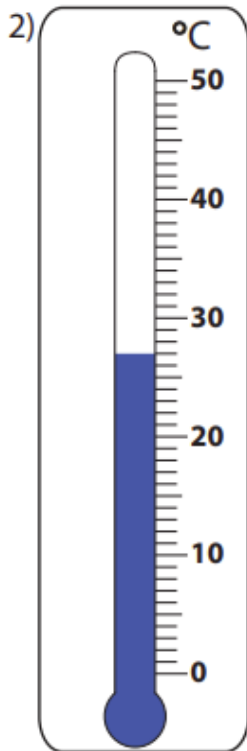
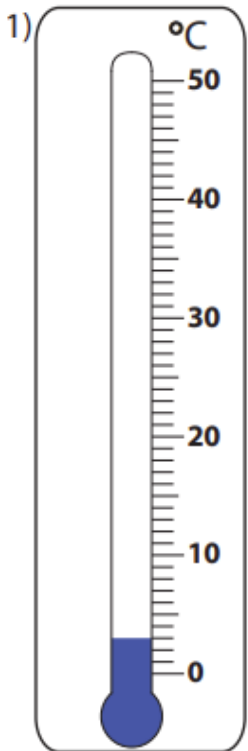
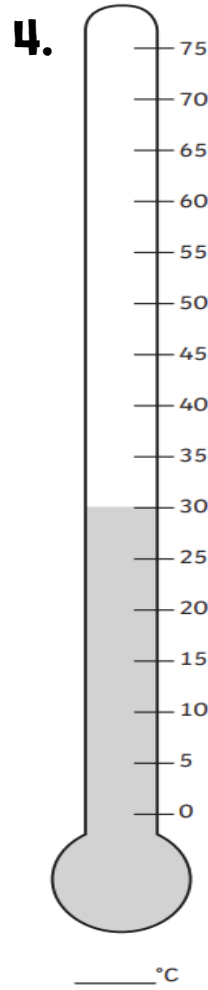
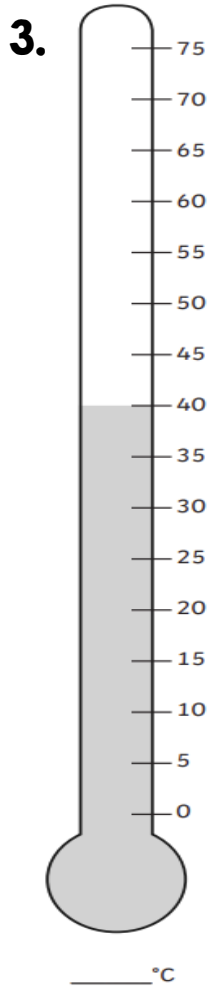
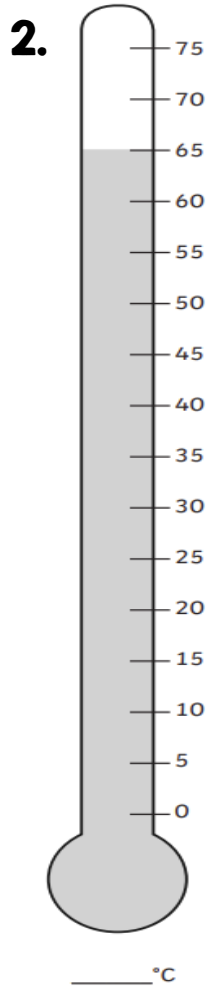
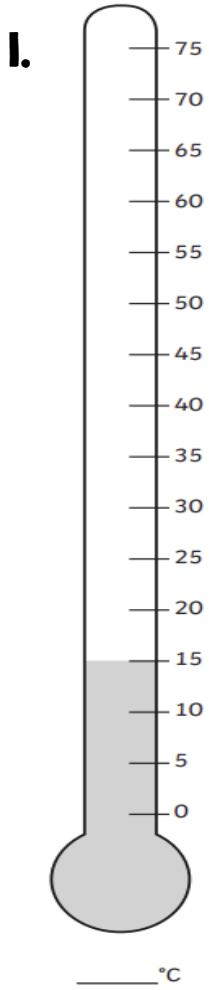
Rating: ★ ★ ★ ★ ★

Picture from story:

I liked/disliked this book because:

Maths - Friday

L1: To read thermometers



English - Thursday and Friday

L1: To write a recount.

Can you write a recount all about your experiences taking part in the Year 2 Home Winter Olympics? You can use the sentence starters below!

Earlier this week, ...

First, I.../Then, / After that, / Later, / Next,

I felt...

I liked this because

- - -

My favourite event was...

I liked this because...